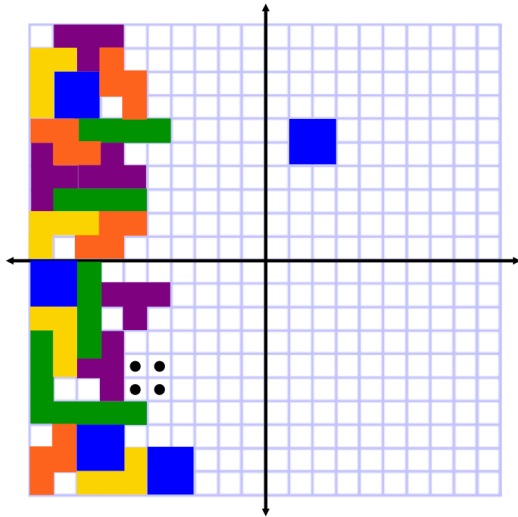


1-6 Multiple Transformations

Name _____ Per. ____

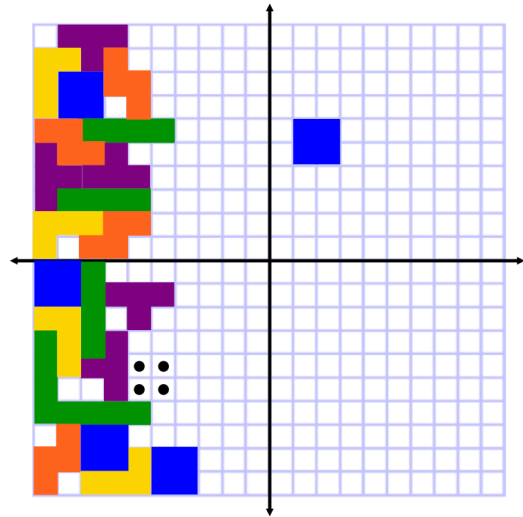
1. List the transformations necessary to move the **square block** into the indicated spot.




1-6 Multiple Transformations

Name _____ Per. ____

1. List the transformations necessary to move the **square block** into the indicated spot.



2. List the transformations necessary to move the **square block** into the indicated spot.



2. List the transformations necessary to move the **square block** into the indicated spot.

