

2-3 Comparing Functions

Name _____ Per. ____

Determine the type of functions.
Then, find one similarity and one difference.

1.

| x | y |
|----|----|
| -6 | 13 |
| -5 | 18 |
| -4 | 23 |
| -3 | 28 |
| -2 | 33 |
| -1 | 38 |

| x | y |
|----|-----|
| -2 | 18 |
| -1 | 11 |
| 0 | 4 |
| 1 | -3 |
| 2 | -10 |
| 3 | -17 |

2-3 Comparing Functions

Name _____ Per. ____

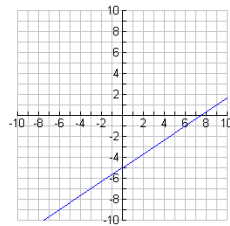
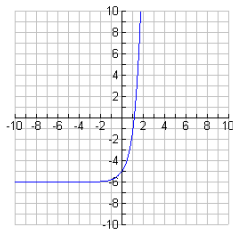
Determine the type of functions.
Then, find one similarity and one difference.

1.

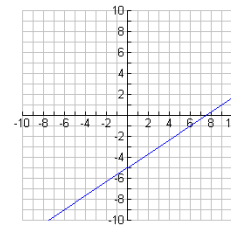
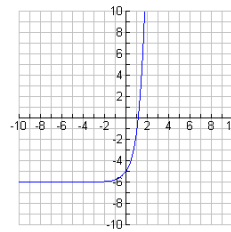
| x | y |
|----|----|
| -6 | 13 |
| -5 | 18 |
| -4 | 23 |
| -3 | 28 |
| -2 | 33 |
| -1 | 38 |

| x | y |
|----|-----|
| -2 | 18 |
| -1 | 11 |
| 0 | 4 |
| 1 | -3 |
| 2 | -10 |
| 3 | -17 |

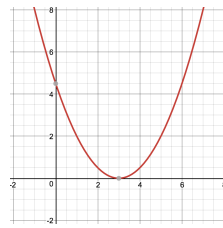
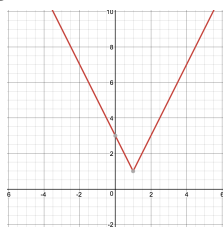
2.



2.



3.



3.

