

## 2-8 Identifying Functions

Name \_\_\_\_\_ Per. \_\_\_\_

Determine if each relation below is a function. Explain why or why not.

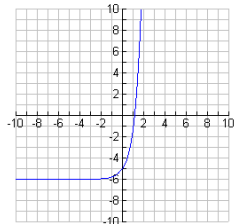
1. Function: YES NO

x	y
-6	13
-4	18
-2	25
0	34
2	45
4	58

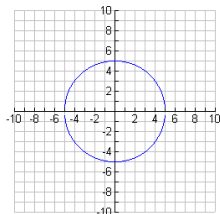
2. Function: YES NO

x	y
3	18
8	11
11	4
7	-6
2	18
-1	21

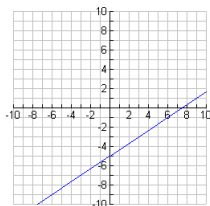
3. Function: YES NO



4. Function: YES NO



5. Function: YES NO



## 2-8 Identifying Functions

Name \_\_\_\_\_ Per. \_\_\_\_

Determine if each relation below is a function. Explain why or why not.

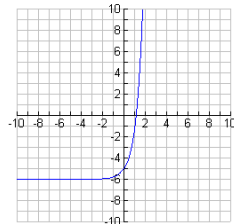
1. Function: YES NO

x	y
-6	13
-4	18
-2	25
0	34
2	45
4	58

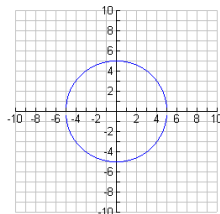
2. Function: YES NO

x	y
3	18
8	11
11	4
7	-6
2	18
-1	21

3. Function: YES NO



4. Function: YES NO



5. Function: YES NO

