

3-1 Slope-Intercept Form

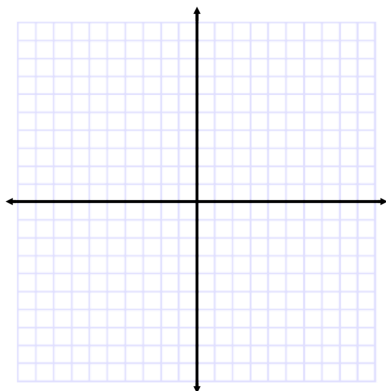
Name _____

Per. ____

Make a table for each equation below. Then, graph each equation.

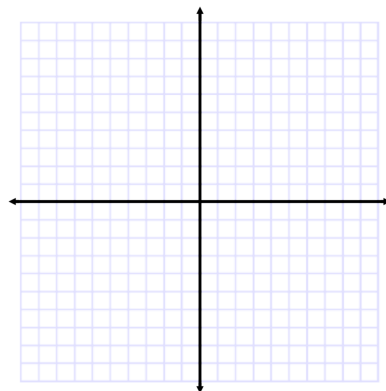
1. $y = 3x + 4$

x	y



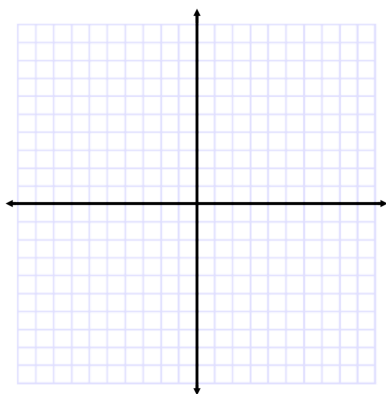
4. $y = -2x - 5$

x	y



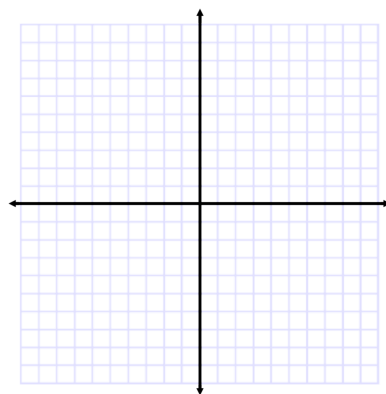
2. $y = -x + 3$

x	y



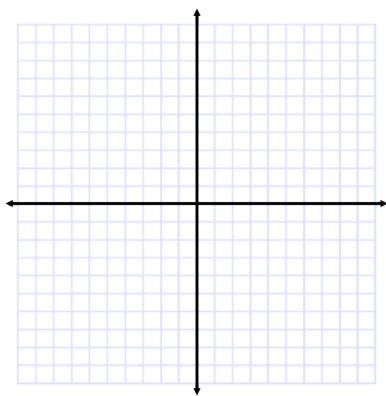
5. $y = 4$

x	y



3. $y = \frac{1}{4}x + 4$

x	y



6. $y = -\frac{1}{2}x + 1$

x	y

