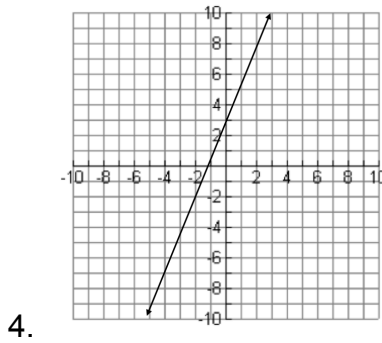
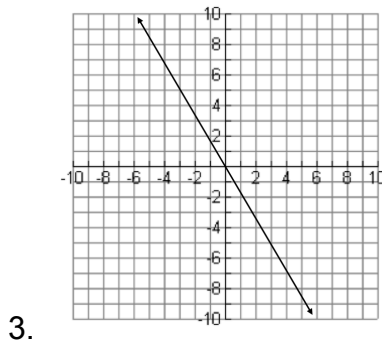
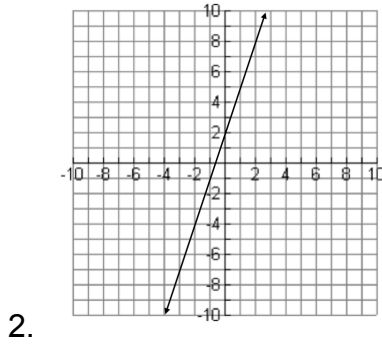
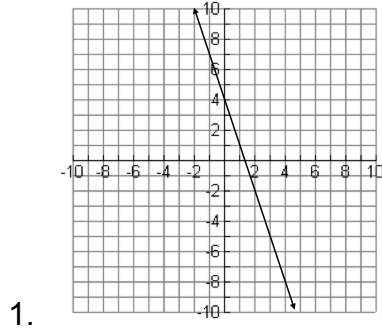


3-3 Slope-Intercept Form [Graphs]

Name \_\_\_\_\_ Per. \_\_\_\_

Write the slope-intercept form ( $y = mx + b$ ) of the equation of each line.



3-3 Slope-Intercept Form [Graphs]

Name \_\_\_\_\_ Per. \_\_\_\_

Write the slope-intercept form ( $y = mx + b$ ) of the equation of each line.

