

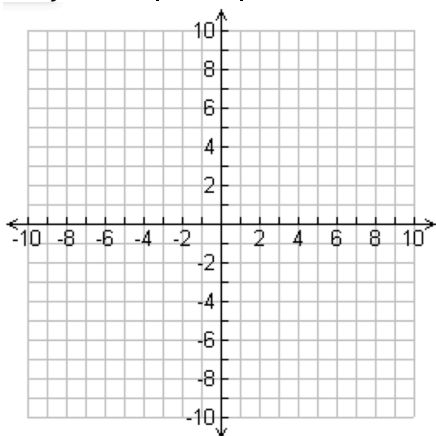
4-2 Graphing Absolute Value

Name _____

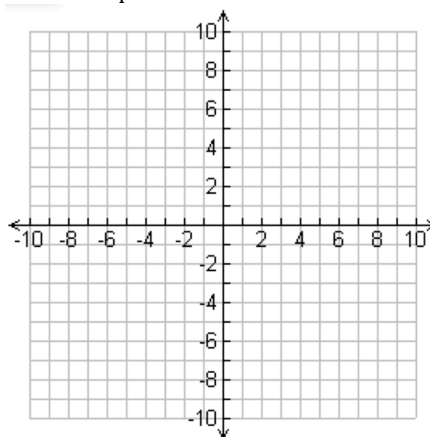
Per. ____

Graph the following absolute value functions. **Find both x-intercept(s) and y-intercept.**

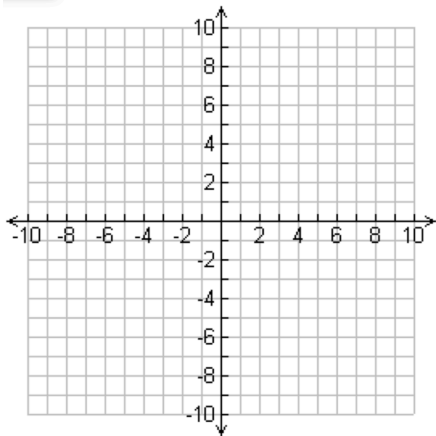
1. $y = -2|x - 2| + 4$



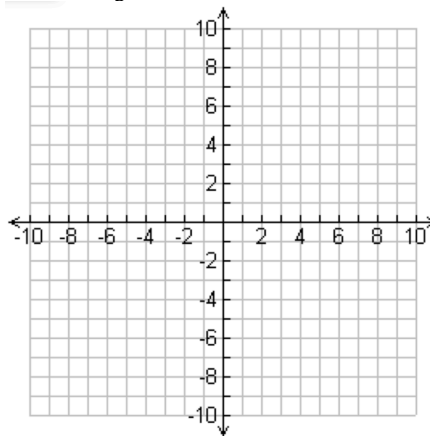
4. $y = \frac{3}{4}|x|$



2. $y = -\frac{3}{2}|x - 5| + 8$



5. $y = \frac{2}{3}|x + 2| - 3$



3. $y = |x + 3| - 6$

