

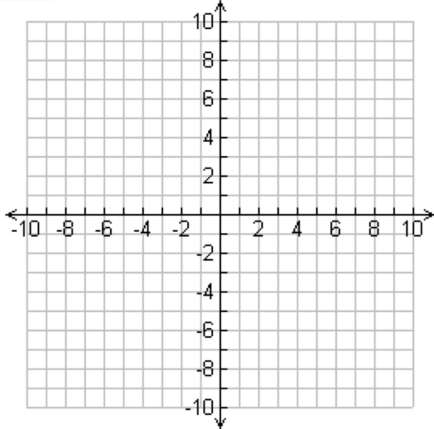
4-3 Graphing Quadratic

Name _____

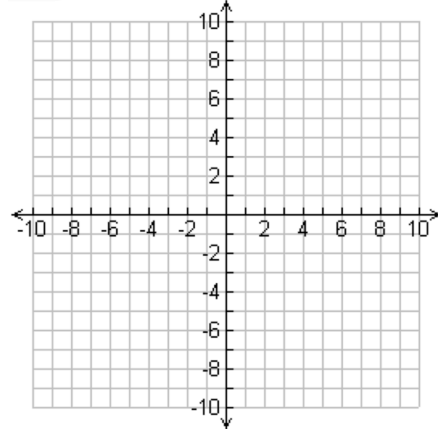
Per. ____

Graph the following quadratic functions by making a table.

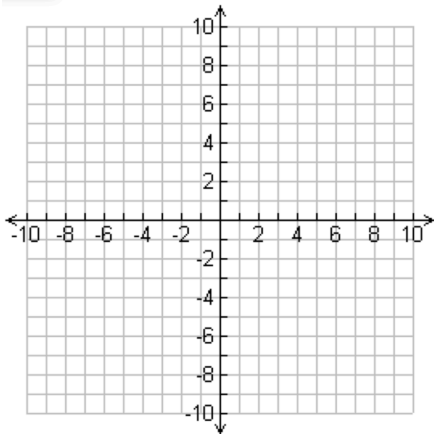
1. $y = -2(x - 2)^2 + 6$



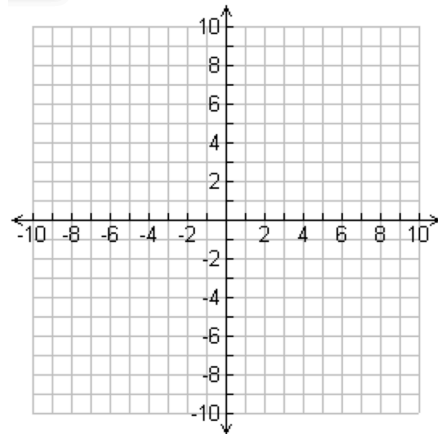
4. $y = 3(x - 4)^2 - 7$



2. $y = (x + 1)^2$



5. $y = -4(x + 3)^2 + 9$



3. $y = -(x - 3)^2 - 4$

