

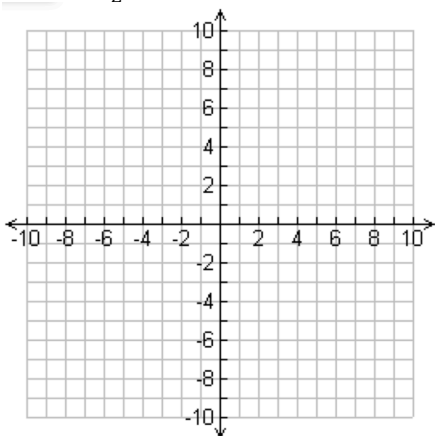
4-4 Graphing Quadratic (Fractions)

Name _____

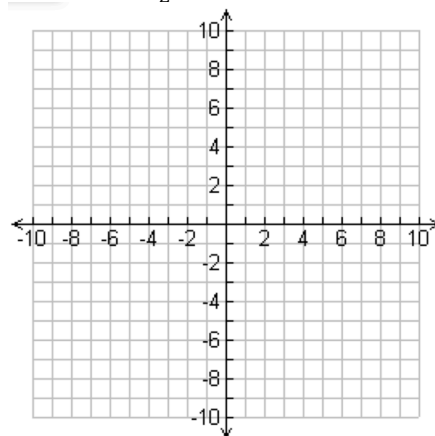
Per. ____

Graph the following quadratic functions by making a table.

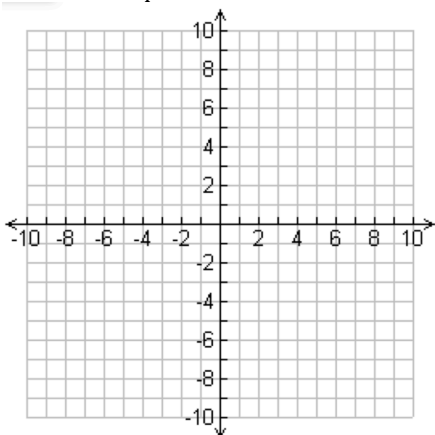
1. $y = \frac{1}{2}(x - 2)^2 + 5$



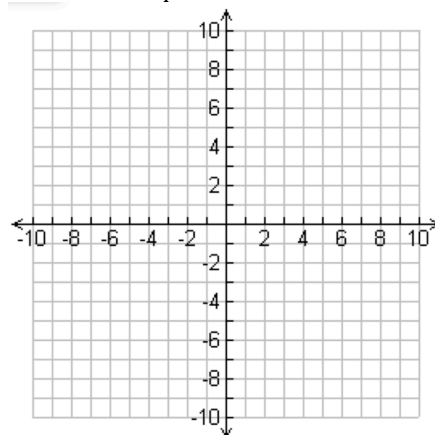
4. $y = -\frac{1}{2}(x + 3)^2 - 1$



2. $y = -\frac{1}{4}x^2$



5. $y = -\frac{1}{4}(x + 4)^2 + 7$



3. $y = \frac{1}{3}(x - 6)^2 - 3$

