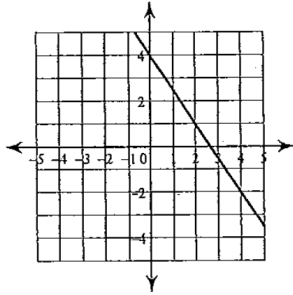


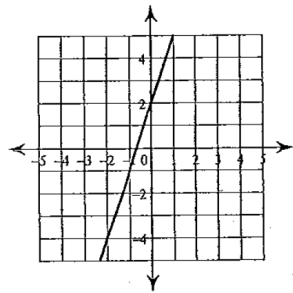
### 5-1 Writing Linear Equations from Graphs

Name \_\_\_\_\_ Per. \_\_\_\_

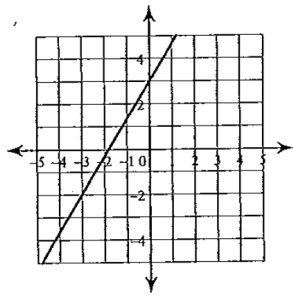
Write the equation of the line in slope-intercept form. Then choose a point from each line to prove your equation.



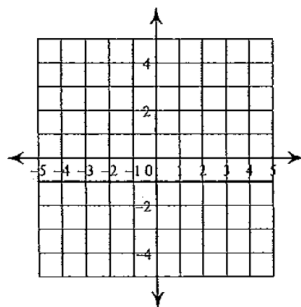
1.



2.



3.

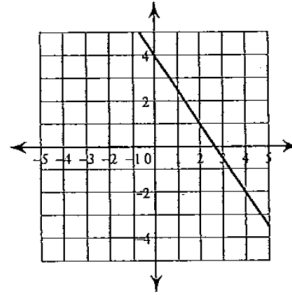


4.

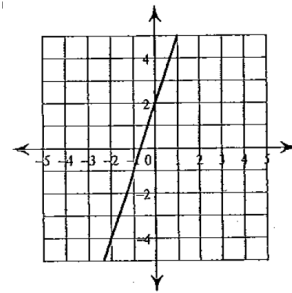
### 5-1 Writing Linear Equations from Graphs

Name \_\_\_\_\_ Per. \_\_\_\_

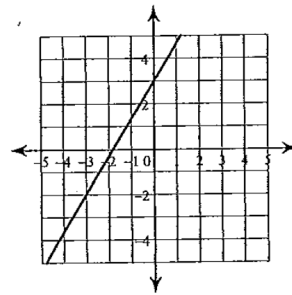
Write the equation of the line in slope-intercept form. Then choose a point from each line to prove your equation.



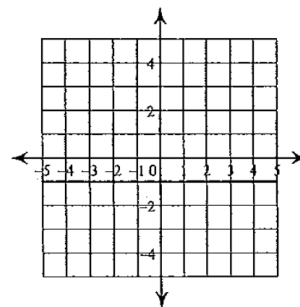
1.



2.



3.



4.