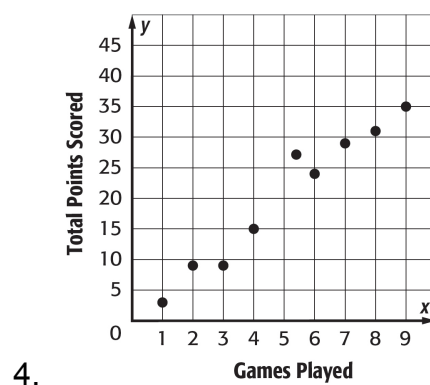
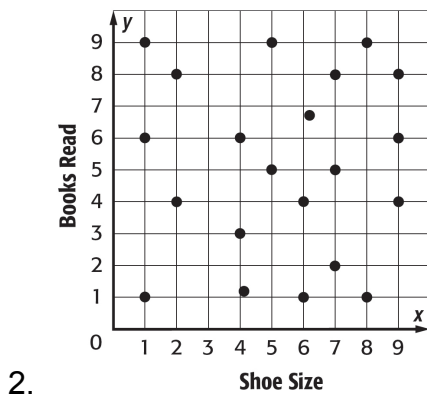
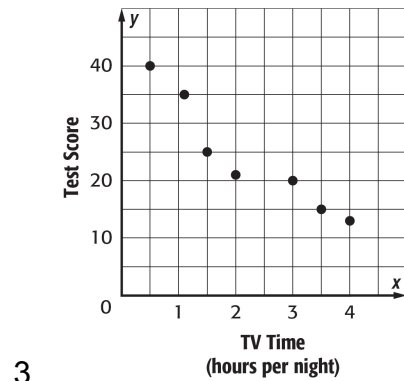
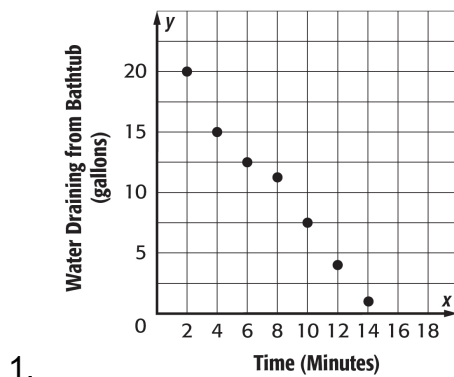


5-5 Scatter Plots

Name _____

Per. ____

Explain whether the scatter plot of the data for each of the following shows a *positive*, *negative*, or no association. Interpret the scatter plot.



5. The number of pieces in a jigsaw puzzle and the number of minutes required for a person to complete it is shown below.

Number of Pieces	100	60	500	750	1000	800	75
Time (min)	35	20	175	315	395	270	25

- Make a scatter plot of the data.
- Interpret the scatter plot of the data based on the shape of the distribution.

