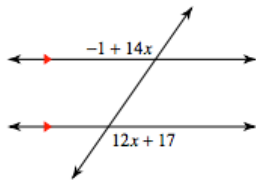


6-4 Applying Algebra to Angle Relationships

Name _____ Per. ____

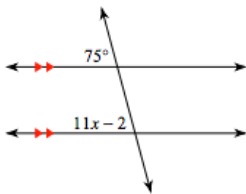
Determine the measure of x using angle properties. Make sure to SHOW YOUR WORK and label the angle property.

1.



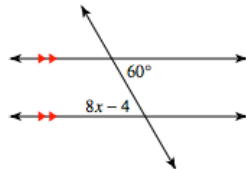
Property: _____

2.



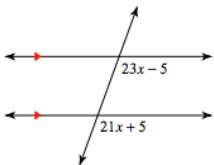
Property: _____

3.



Property: _____

4.



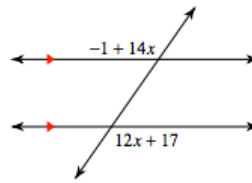
Property: _____

6-4 Applying Algebra to Angle Relationships

Name _____ Per. ____

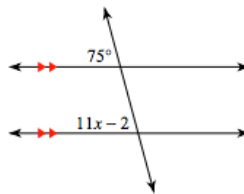
Determine the measure of x using angle properties. Make sure to SHOW YOUR WORK and label the angle property.

1.



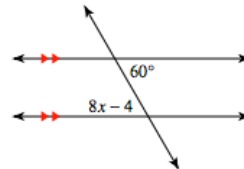
Property: _____

2.



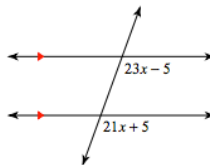
Property: _____

3.



Property: _____

4.



Property: _____