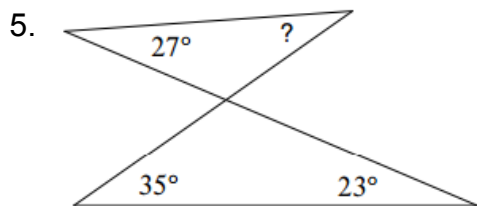
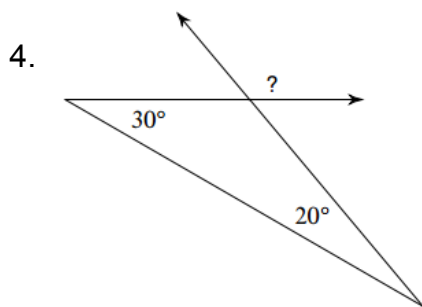
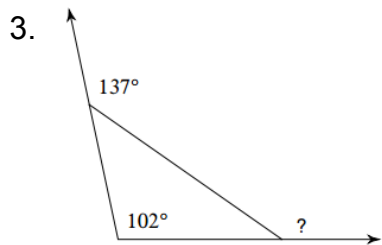
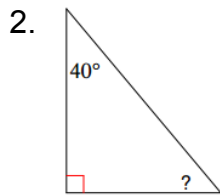
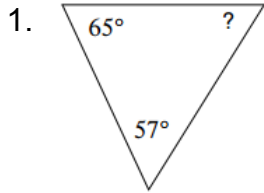


6-5 Angles of Triangles

Name _____ Per. ____

Find the measure of each angle indicated.



6-5 Angles of Triangles

Name _____ Per. ____

Find the measure of each angle indicated.

