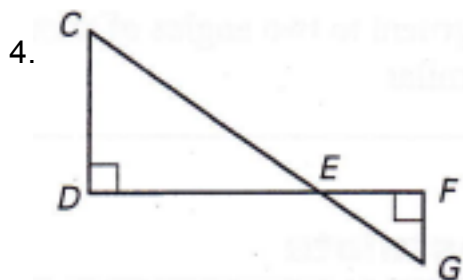
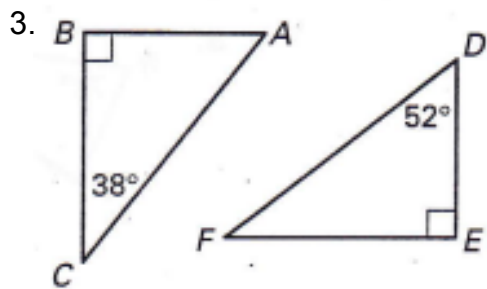
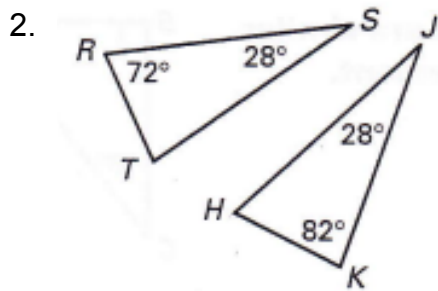
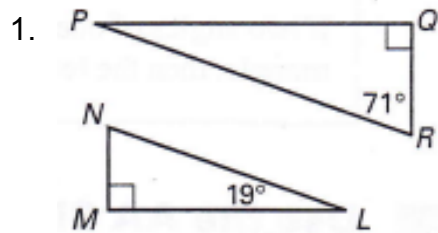


6-6 Similar Triangles

Name _____ Per. ____

Determine if the pairs of triangles are similar. Explain your reasoning.



6-6 Similar Triangles

Name _____ Per. ____

Determine if the pairs of triangles are similar. Explain your reasoning.

