

7-1 Solving Basic Inequalities

Name \_\_\_\_\_ Per. \_\_\_\_

Solve and graph the following inequalities.


1.  $6(3 + 3n) \geq -126$




2.  $-124 \geq 4(1 - 8a)$




3.  $-421 \geq -8(-3 - 7m) + 3$



4.  $-248 > 4(2 - 8x)$



5.  $8k - 13 > 5k + 2$



7-1 Solving Basic Inequalities

Name \_\_\_\_\_ Per. \_\_\_\_

Solve and graph the following inequalities.

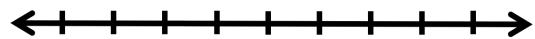
1.  $6(3 + 3n) \geq -126$




2.  $-124 \geq 4(1 - 8a)$



3.  $-421 \geq -8(-3 - 7m) + 3$



4.  $-248 > 4(2 - 8x)$



5.  $8k - 13 > 5k + 2$

