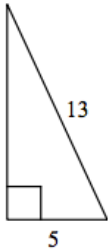


8-1 Pythagorean Theorem

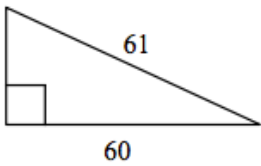
Name _____ Per. ____

Write an equation you could use to find the length of the missing side of these right triangles. Then find the missing length. Round to the nearest tenth if necessary.

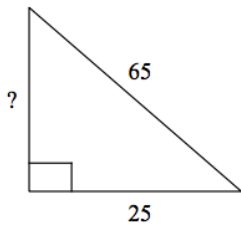
1. _____



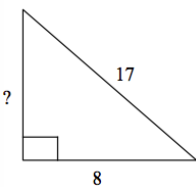
2. _____



3. _____



4. _____



8-1 Pythagorean Theorem

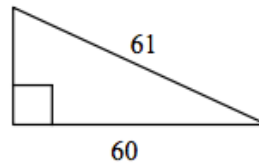
Name _____ Per. ____

Write an equation you could use to find the length of the missing side of these right triangles. Then find the missing length. Round to the nearest tenth if necessary.

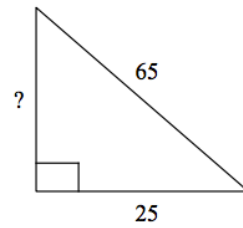
1. _____



2. _____



3. _____



4. _____

