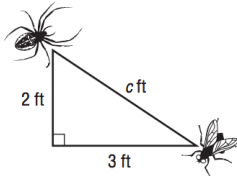


8-2 Pythagorean Theorem

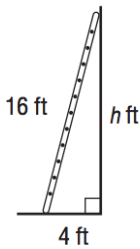
Name \_\_\_\_\_ Per. \_\_\_\_

Write an equation and show your work!

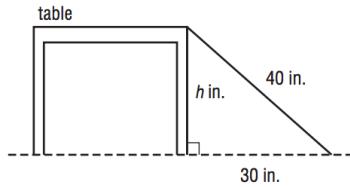
1. How far apart are the spider and the fly?



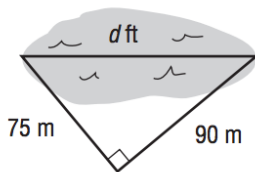
2. How high will the ladder reach?



3. How tall is the table?



4. How far is it across the pond?

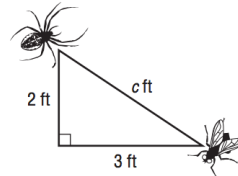


8-2 Pythagorean Theorem

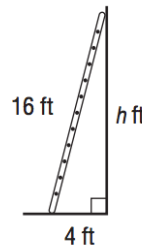
Name \_\_\_\_\_ Per. \_\_\_\_

Write an equation and show your work!

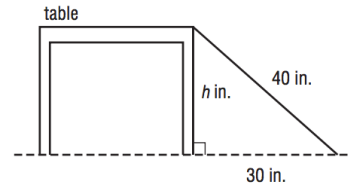
1. How far apart are the spider and the fly?



2. How high will the ladder reach?



3. How tall is the table?



4. How far is it across the pond?

