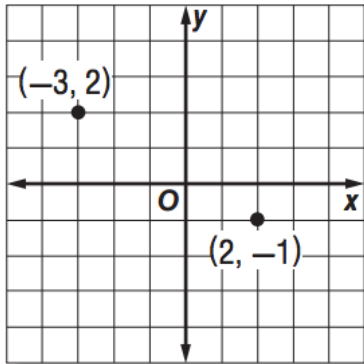


8-3 Distance Formula

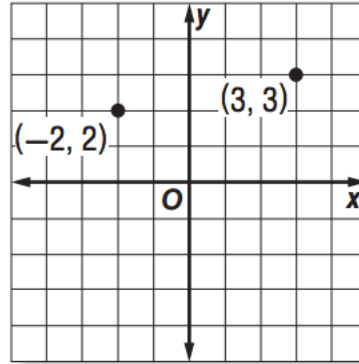
Name _____ Per. ____

Find the distance between each pair of points. Round to the nearest tenth if necessary.

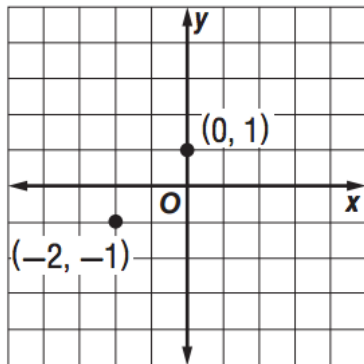
1.



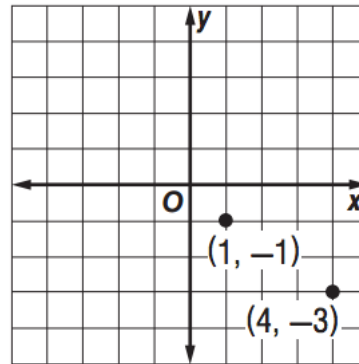
4.



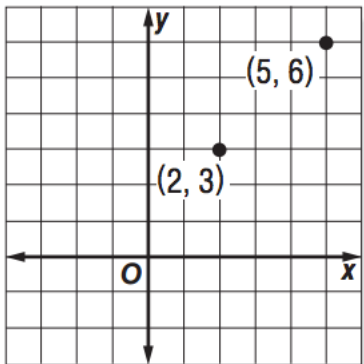
2.



5.

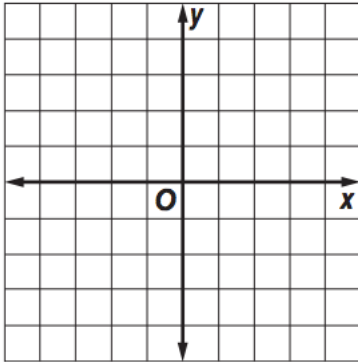


3.

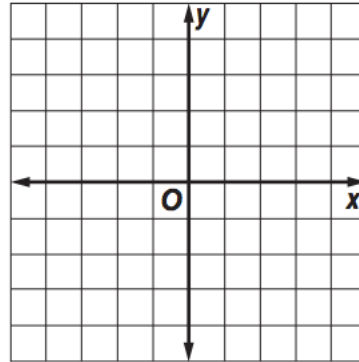


Graph each pair of ordered pairs. Then find the distance between the points. Round to the nearest tenth if necessary.

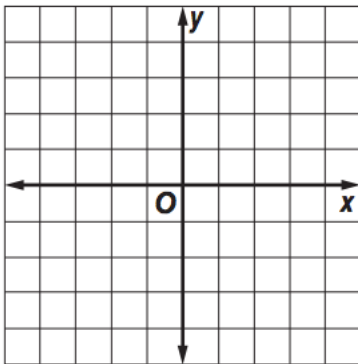
6. $(-3, 0)$ and $(3, -2)$



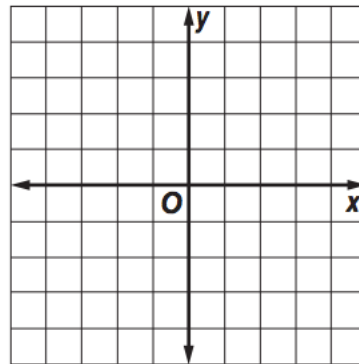
9. $(-2, 1)$ and $(-1, 2)$



7. $(-4, -3)$ and $(2, 1)$



10. $(0, 0)$ and $(-4, -3)$



8. $(0, 2)$ and $(5, -2)$

