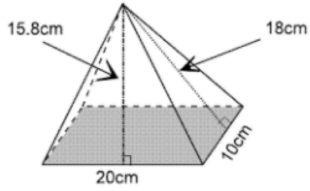


### 8-4 Surface Area of Pyramids

Name \_\_\_\_\_ Per. \_\_\_\_

Find the surface area of each pyramid.  
Round to the nearest tenth if necessary.

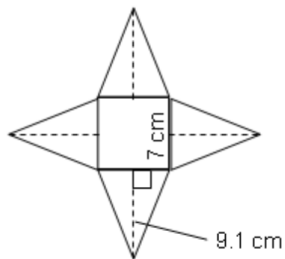
1.



2.



3.

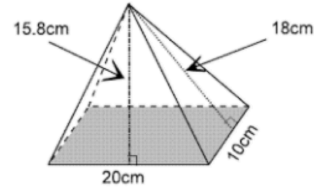


### 8-4 Surface Area of Pyramids

Name \_\_\_\_\_ Per. \_\_\_\_

Find the surface area of each pyramid.  
Round to the nearest tenth if necessary.

1.



2.



3.

