

# 8-4 Writing Inequalities from Graphs

Name \_\_\_\_\_

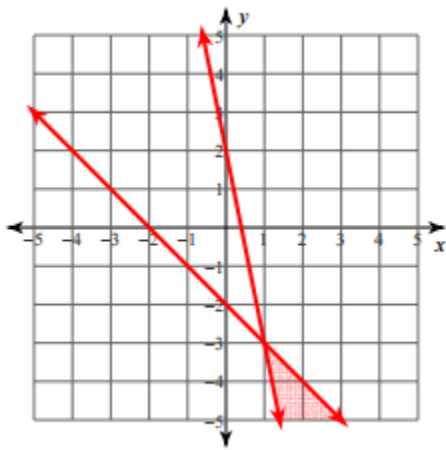
Per. \_\_\_\_

Write the system of inequalities that matches the following graphs below.

1.

\_\_\_\_\_

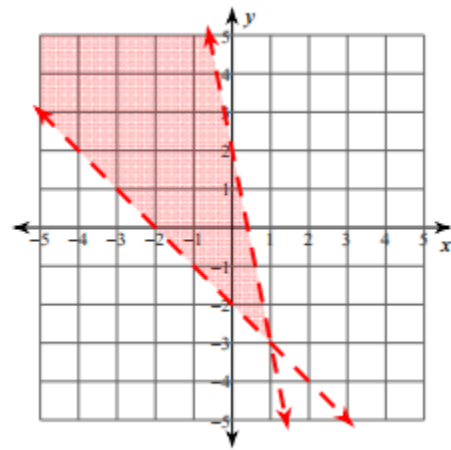
\_\_\_\_\_



3.

\_\_\_\_\_

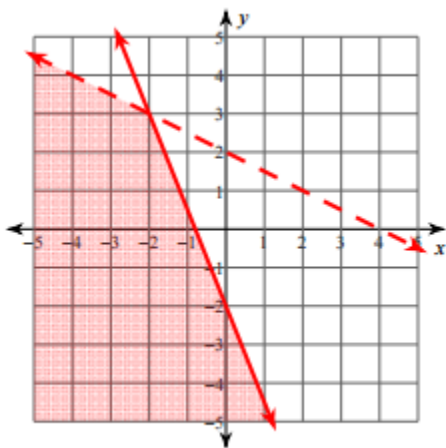
\_\_\_\_\_



2.

\_\_\_\_\_

\_\_\_\_\_



4.

\_\_\_\_\_

\_\_\_\_\_

