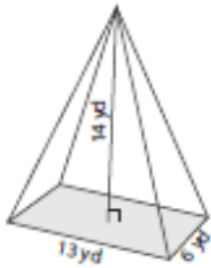


8-5 Volume of Pyramids

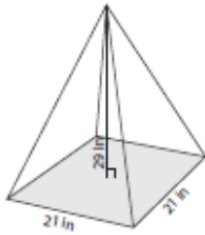
Name _____ Per. ____

Find the volume of each pyramid.
Round to the nearest tenth if necessary.

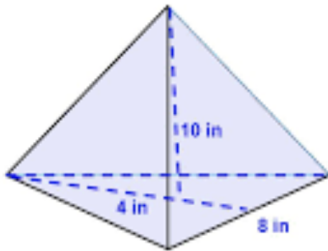
1.



2.



3.



4.

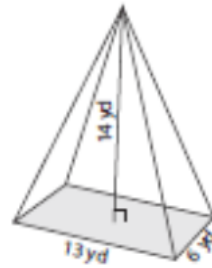


8-5 Volume of Pyramids

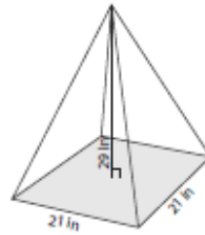
Name _____ Per. ____

Find the volume of each pyramid.
Round to the nearest tenth if necessary.

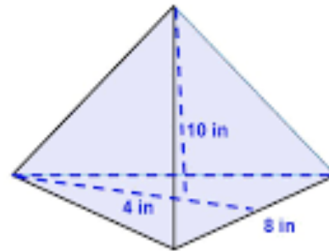
1.



2.



3.



4.

