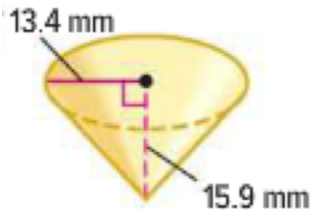


8-6 Volume of Cones

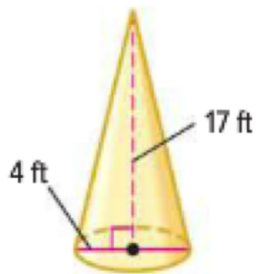
Name \_\_\_\_\_ Per. \_\_\_\_

Find the volume of each cone. Round to the nearest tenth.

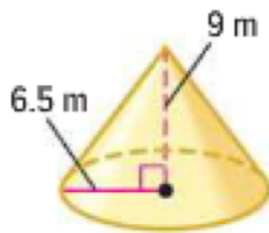
1.



2.



3.



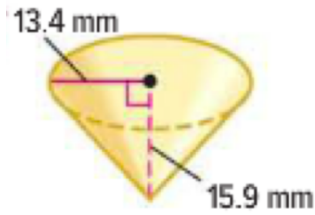
4. Height: 9 inches  
Diameter:  $7 \frac{1}{2}$  inches

8-6 Volume of Cones

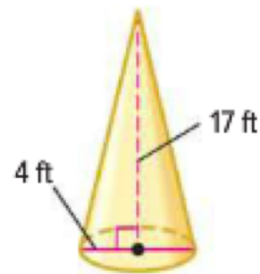
Name \_\_\_\_\_ Per. \_\_\_\_

Find the volume of each cone. Round to the nearest tenth.

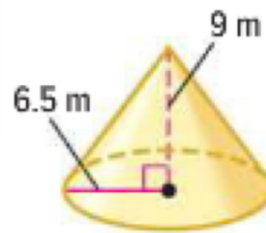
1.



2.



3.



4. Height: 9 inches  
Diameter:  $7 \frac{1}{2}$  inches