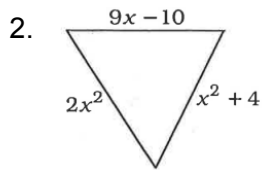
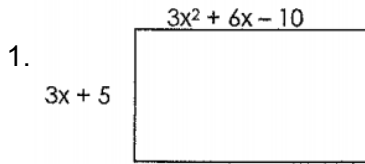


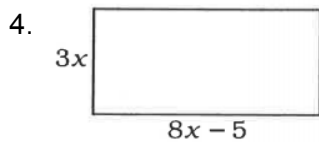
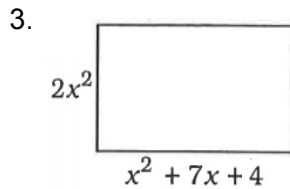
9-4 Polynomials in Context

Name _____ Per. ____

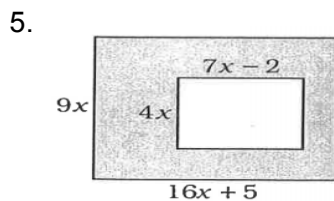
Find the perimeter of each figure. SHOW YOUR WORK!



Find the area of each figure. SHOW YOUR WORK!



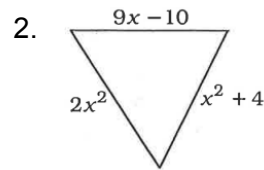
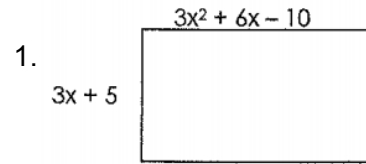
Find the area of the shaded region. SHOW YOUR WORK!



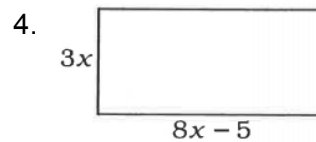
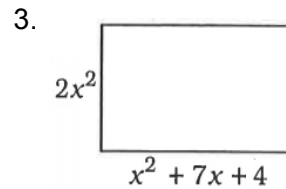
9-4 Polynomials in Context

Name _____ Per. ____

Find the perimeter of each figure. SHOW YOUR WORK!



Find the area of each figure. SHOW YOUR WORK!



Find the area of the shaded region. SHOW YOUR WORK!

